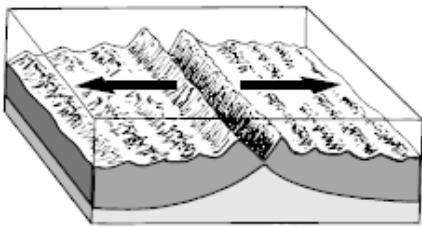


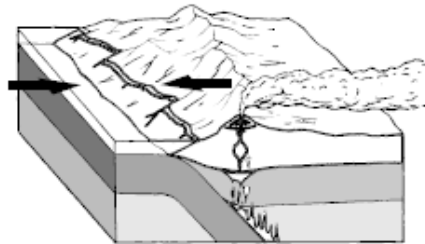
Name _____

Plate Tectonics Worksheet

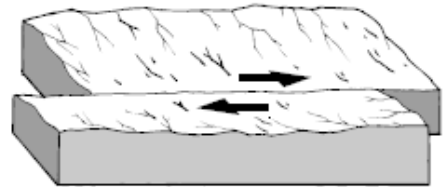
Label each figure by writing the type of plate boundary it shows.



1. _____



2. _____



3. _____

4. In your own words, state the theory of plate tectonics?

5. Describe what happens when two plates carrying oceanic crust collide.

6. Describe what happens when two plates carrying continental crust collide

7. Describe what happens when a plate carrying oceanic crust collides with a plate carrying continental crust.

8. Explain what force caused the movement of the continents from one supercontinent to their present positions.

9. Breaks in Earth's crust where rocks have slipped past each other are called _____.

10. The lithosphere is broken into separate sections called _____ and _____.

11. A(n) _____ is a deep valley on land that forms along a divergent boundary.

12. Explain what happens at a subduction zone.